


NID-UG Mock Test-1

All the best :)





**B.Des/GDPD
DAT Prelims
Test Paper**

Part-I

FOR OFFICIAL USE ONLY

PART-I

Questions 1 to 21 are multiple choice questions. Please read the question carefully and select your response from the options provided. The correct answer must be marked in the OMR answer sheet provided separately. Do not write your name anywhere in the booklet. This will lead to disqualification.

Question Nos. 1 to 14 carry 1.0 mark each.

Q1. Which one of the following is associated with this image?

- (A) Medical Emergency (C) First Aid
(B) Ambulance (D) Doctor



Q2. 'Kantha' is the traditional craft of which state?

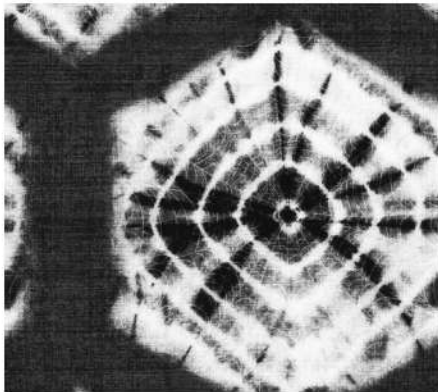
- (A) Karnataka (C) Orissa
(B) West Bengal (D) Bihar

Q3. "Kuchipudi" is a classical dance from the state:

- (A) Tamil Nadu (C) Odisha
(B) Kerala (D) Andhra Pradesh

Q4. The image shows which textile printing technique?

- (A) Batik (C) Ajrak
(B) Bandhani (D) Sanganeri




Q5. Which sentence best describe the image below?

- (A) Just you and me
(B) You just black and me white
(C) Just in between you and me
(D) Just you and me inside a box



Q6. The image shows which Indian music instrument?

- (A) Santoor (C) Tanpura
(B) Sarod (D) Sarangi

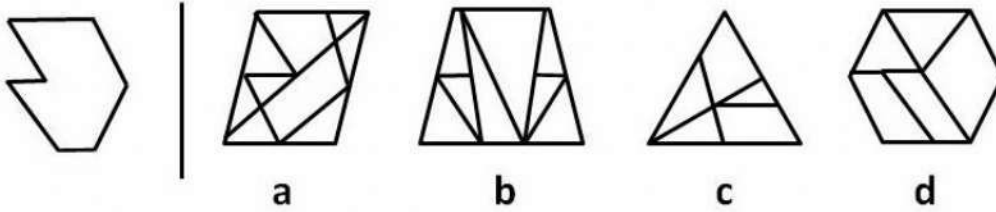


Q7. "Bhagavad Gita" is written by:

- (A) Veda-Vyasa
- (B) Kalidasa

- (C) Bharata
- (D) Kautilya

Q8. The shape on the left is hidden in one of the five shapes on the right of the line (it is exactly the same size). Which of the five shapes contains the shape on the left?



Q9. How many states and union territories are there in India?

- (A) 27 states & 8 union territories
- (B) 27 states & 9 union territories

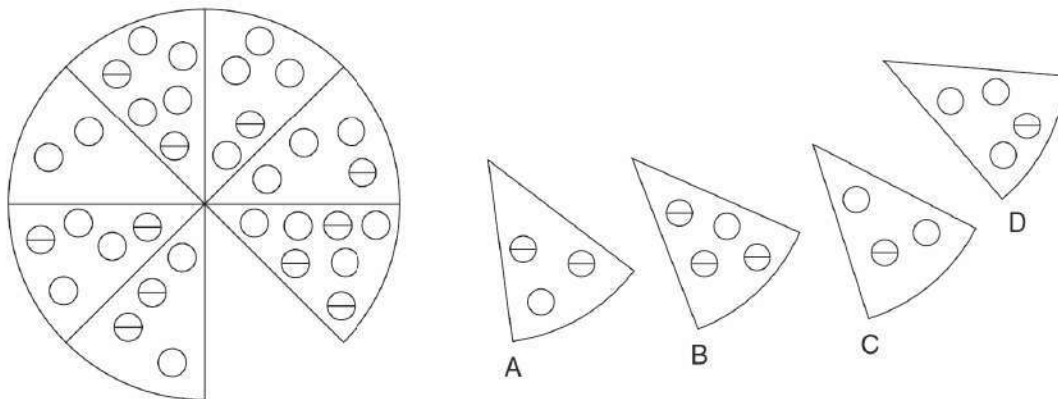
- (C) 29 states & 9 union territories
- (D) 28 states & 9 union territories

Q10. Chandrayaan-2 was launched from which city?

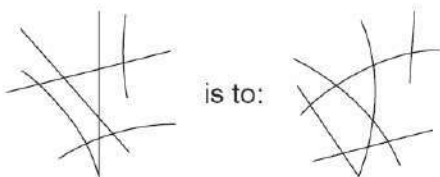
- (A) Bangalore
- (B) Pokhran

- (C) Sriharikota
- (D) Vellore


Q11. Observe the images below and identify the missing pie?



Q12. If



as:



is to:



A



B

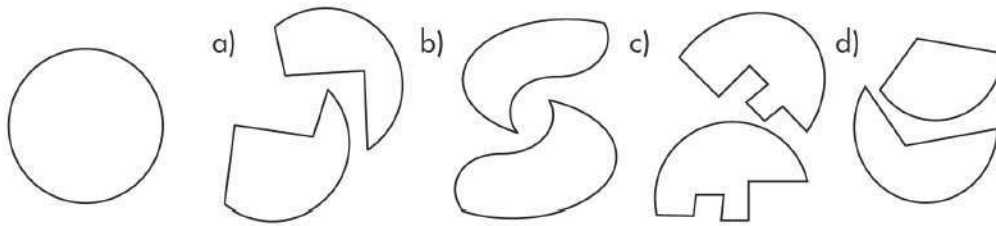


C



D

Q13. Observe the images below and select the right answer choice that represents the two parts which join together to make the given circle. Pieces may be reflected and/or rotated.




Q14. The below leaf belongs to which tree/plant?

- (A) Tumarind
- (B) Neem
- (C) Curry Tree (Kadhi Patta)
- (D) Potato Leaf



Question Nos. 15 to 19 carry 2.0 marks each.

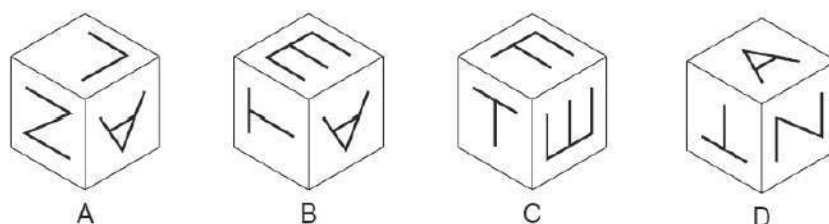
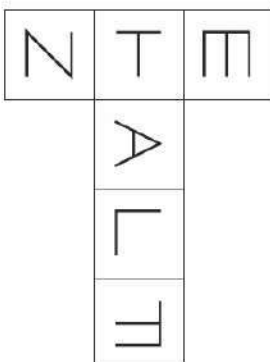
Q15. Which shape will exactly to the figure on the left ?



Q16. At a party, everyone shook hands with everybody else. There were 66 handshakes. How many people were at the party?

- (A) 11
- (B) 6
- (C) 8
- (D) 12

Q17. When this shape is folded to form a cube, which is the only one of the following that can be produced?



Q18. Solve the below problem:

$$1 + \text{Cat} \times \text{Cat} = 17$$

$$\text{Cat} \times \text{Mouse} \times \text{Mouse} = 36$$

$$\text{Cat} \times \text{Mouse} \times \text{Cheese} = 72$$

$$\text{Cat} - \text{Mouse} + \text{Cheese} = ?$$

- (A) 3
- (B) 5

- (C) 2
- (D) 4

Q19. Count the total no. of triangles in the below figure.



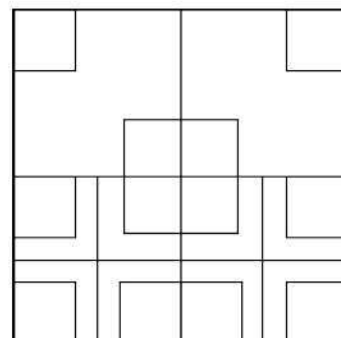
- (A) 7
- (B) 8

- (C) 9
- (D) 10

Question Nos. 20 to 21 carry 3.0 marks each.


Q20. Count the total no. of squares in the below figure.

- (A) 24
- (B) 23
- (C) 27
- (D) 26

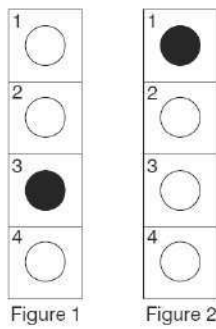


Q21. An electrical circuit wiring a set of four lights depends on a system of switches A, B, C and D. Each switch when working has the following effect on the lights:

- Switch A turns lights 1 and 2 on/off or off/on
- Switch B turns lights 2 and 4 on/off or off/on
- Switch C turns lights 1 and 3 on/off or off/on
- Switch D turns lights 3 and 4 on/off or off/on



In the following, switches B C A D are thrown in turn, with the result that Figure 1 is transformed into Figure 2. One of the switches is therefore not working and has had no effect on the numbered lights. Identify which one of the switches is not working.



End of Part-1


**B.Des/GDPD
DAT Prelims
Test Paper**

Part-II



Questions 22 to 26 are subjective questions. Do not write your name anywhere in the booklet. This will lead to disqualification.


Q22. Observe the below vector image showing an activity. Visualize the same activity/scenario in humorous cartoon and draw it in the given frame. (Marks:12)



Q23. a) Identify the below images and write down the name of the object under it. (Marks: 2.5)



b) Draw any one identified object with maximum no. of details. In addition write down the materials and use of the object in given frame on next page. (Marks: 7.5)




Q24. Observe the below photograph and then visualize the another photograph/Scenario from the perspective of Auto Rikshaw driver at the moment when this photograph was taken. Do not use colors. (Marks: 15)



A large empty rectangular box provided for the student to draw or write their visualization from the driver's perspective.


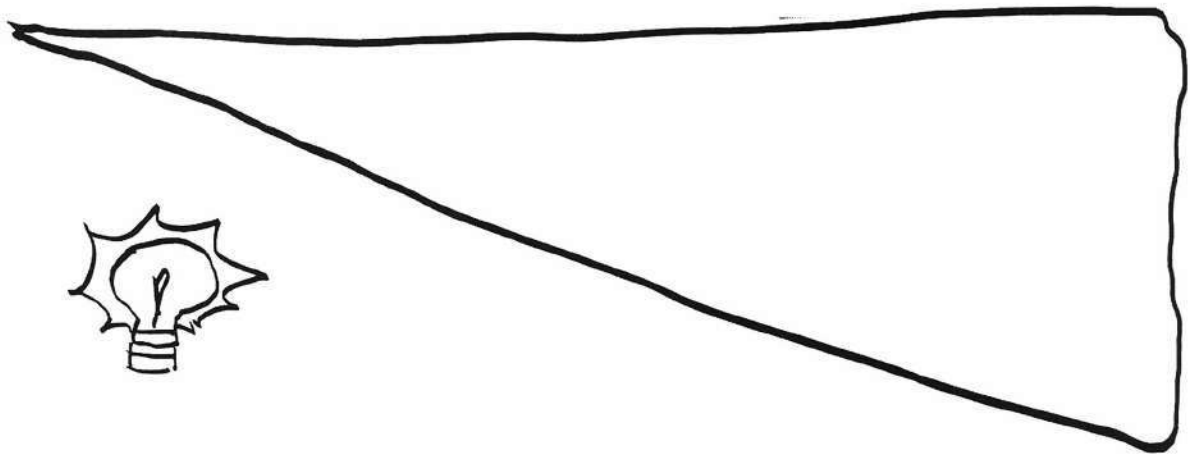

Q25. Design a safety geometric compass for a 4-5 years old kid in a way he/she can draw circles for making their drawings easy. Write about it in maximum 50 words. (Marks: 18)




Q26. Three frames are given in the following pages with a few elements already drawn or written. Using these elements, without changing their sequence, build a story by adding relevant drawings and text in suitable places. (Marks: 15)



2





Moral: _____

End of Part-2

Space for Rough Work

**For the answer sheet,
message or whatsapp us on 9888543187.**

**For more
free Mock Tests and study material check
our store on our app.**



Scan QR code to download the app

Space for Rough Work